



POLE STAR PUBLIC SCHOOL

Sector-7 (Extn.) Gurugram (HR.)

WINTER HOLIDAY'S HOMEWORK

SESSION: 2024-2025

CLASS – V



Winter vacation is a time to relax and celebrate the time in the company of your family, friends and celebrate New Year with your family. During the winter season, everyone enjoys sweets, cakes, and delicious dishes made by your mother.

Please take note of the following suggestions:

- Encourage your child to converse in English.
- Encourage your child to watch informative program on television.
- Help them revise all the concepts done so far.
- Parents are requested to only guide their children while doing their Sample Paper.

POLE STAR PUBLIC SCHOOL

SECTOR-7 EXTN.GURUGRAM, HARYANA
SAMPLE PAPER (2024-2025)

Class- V
M.M- 80

Subject- English
Time-3 Hours

GENERAL INSTRUCTIONS

- This paper is divided into three sections: A, B and C. All questions are compulsory.
- Separate instructions are given with each section and question wherever necessary. Read these instructions very carefully and follow them.
- Do not exceed the prescribed word limit while answering the questions.

SECTION – A (READING)

1. Read the following passage and answer the questions. (10)

Lohri is celebrated in Punjab on 13th January. This festival is famously known for kite flying. Special dishes which are eaten on this occasion are gajak , sarson ka saag and makki di roti, groundnuts and jaggery.

Lohri is also seen by some to be a festival of the harvest of the Ravi crop. Other than kite flying there are also celebrations like a bonfire, Singing and dancing. On this day children go from door to door singing folk songs and collect sweets and money. The collection by children is called lohri and consist of til, Jaggery , popcorn etc. Which are thrown into the bonfire. This represent burning of the old year and start the next year on Magahi.

Special Lohri songs are also sung during this festival. On the beat of dhole, people dance bhangra and gidda dances wearing brightly coloured clothes. All the families gather and celebrate this festival with happiness and joy.

- a) Where is Lohri celebrated?
- b) What is the festival famous for?
- c) Which are the special dishes of Lohri?
- d)What collection is called Lohri?
- e) What does the bone fire represent?
- f) Which dances do the people?
- g) Complete the following sentences.
Lohri is the festival of the harvest _____
Children go from door to door _____
- i) Write a Synonym for ' Brightly'
- j) All the families gather and celebrate this festival with happiness and joy. True/false

2. Read the following passage and answer the questions. (10)

Buddha walked on fearlessly. Angulimala ran as fast as he could But he could not catch up with him. He swore and shouted at Buddha, but Buddha smile kindly at him and continued to walk throw the forest. This went on for several hours and Angulimala was, At last, tired and sat down. Buddha stood in front of him. His face was shining with kindness for the robber.

“Who are you, man?” Asked Angulimala. Why do you travel through this forest alone? Are not you afraid of Angulimala? Why could not I catch you? What magic do you possess?

Buddha replied gently , “I 'am a friend of yours and I have come to the forest to help you . I 've come to save you from further sin. I am not afraid of you because I love you as I love all other men. My magic is the magic of kindness for all living creatures.”

These noble words touch the cruel heart of Angulimala and he fell at the feet of Buddha. " O Lord save me! " he said sobbing. " I Buddha am the greatest Sinner on earth". He Cried bitterly and tears flowed from his eyes in two unending streams.

- a) Why was Angulimala tired?
- b) In what manner did Buddha stand before the robber?
- c) Which contrast does the author present in the passage?
- d) What was Buddha's reply when Angulimala asked who he was?
- e) What was the magic with Buddha, according to Buddha himself?
- f) Why did the robber fall at the feet of Buddha?

Complete the following sentences.

- g) Two talkers in the passage _____
- h) He cried bitterly _____
- i) Write a noun from the passage.
- j) Write a verb from the passage.

SECTION-B (WRITING & GRAMMAR)

3. Fill in the blanks with suitable conjunction.

(4)

- a) I want to go to the park ____ play on the swings. (but/ and)
- b) It was raining heavily _____ we decided to stay indoors. (If/so)
- c) James wanted to watch a movie, _____ his sister wanted to read a book.(or/ but)
- d) He wants to visit the museum _____ the zoo.

4. Read the following sentences and place the punctuation marks in the correct place.

(4)

- a) what is your favourite movie
- b) hurray we won the match
- c) we will need food drinks games and a blanket for the picnic
- d) ill need two things a box and a thread

5. Choose the correct antonyms for each under line word below.

(2)

- a) There are many active workers in the constructions site.
(i) Busy (ii) Lazy (iii) Easy
- b) Ben looks very old in that grey suit.
(i) Thin (ii) Fat (iii) Young

6. Choose the correct Synonyms for each under line word below.

(2)

- a) I like studying about animals the most.
(i) Enjoy (ii) Hate (iii) Difficult
- b) Bobby was looking for the correct answer to this problem.
(i) Reply (ii) Ask (iii) Borrow

7. Change the underlined verbs into past tense and rewrite the sentences.

(2)

There is a woodcutter in the village. He is very poor. He earns his living by cutting and selling wood. One day, he is cutting down a tree on the bank of a river. His axe fell into the river. He is too poor to buy a new axe. He begins to weep.

8. Fill in the blanks with Will, Shall or going to form of verbs given in bracket.

(2)

- a) Rama is not well. I think she _____(stay) at home today.
- b) _____ I _____(drop)you home?

9. Tick the correct modal verbs from the brackets

(2)

- a) You(should/could) not speak loudly in a library.
- b) Birds (will/can) fly but monkeys cannot.
- c) There (should/may)be some snowfall in the evening.

d) I (will/can) achieve my goal.

10. Add a prefix or suffix to make new words.


(2)

a) Pay

b) Happy

11. Look at the picture given below and describe it in your own words (100 words).

(5)



horse, sheep, tractor, farm, chimney, chicken coop, fence, grain, animals

12. Write a Paragraph of five sentences about “save trees save world” or My favourite hobby

(5)

13. Write a letter to the Principal of your school, requesting him/her to sanction a school trip to the Zoo at Delhi.

(5)

SECTION - C (LITERATURE)

14. Write down the meaning of following words:

(5)

a) Crocuses b) lyricist c) equipment d) dynamite e) innovation

15. Complete the lines from the poem.

(2)

- a) Once there was an _____
- b) Who tried to use the _____.
- c) No! No! I mean an _____
- d) Who tried to use the _____

16. Frame sentences (Any three)

(3)

a) snowdrops b) concentration c) barren d) revolutionary

17. Read the extract given below and answer your question

(5)

“Beneath the robe of glistening white”

The crocuses warmed awake in the night

Stretched themselves, and knew hen the sun

Melted the snow drops one by one

- a) What does “the robe of glistening white mean?”
- b) Which figure of speech is used here?
- c) Write a rhyming word for “white”.
- d) What is the name of the poet?
- e) From which poem these lines are taken?

18. Answer the following questions (Any 5)

(2x5)

- a) What does the pieces of chess represent?
- b) Which was the first Indian talking movie?
- c) Why did the telephone buzz louder?
- d) who motivated Newton the most when he was young?
- e) Why did the administrators want to push jobs ahead to high school?
- f) What amazing theory did Newton give to the world?

पोल स्टार पब्लिक स्कूल सेक्टर 7

एक्सटेंशन गुरुग्राम (हरियाणा)

कक्षा - पांचवी

अधिन्यास परीक्षा (2024-2025)

विषय - हिंदी

कुल अंक - 80

समय : 3 घंटे

सामान्य निर्देश:

1. सभी प्रश्नों के उत्तर देना अनिवार्य है।
2. लेख सुंदर व स्पष्ट लिखे।

(खंड - क) (अपठित-गद्यांश)

1. गद्यांशों को पढ़कर प्रश्नों के उत्तर दीजिए।

(10)

(i) पांडवों और कौरवों के गुरु द्रोणाचार्य थे। द्रोणाचार्य शस्त्र विद्या और शास्त्र विद्या दोनों में निपुण थे। उनकी वीरता के किस्से चारों दिशाओं में फैले थे। उनकी प्रशंसा को सुनकर एक बालक द्रोणाचार्य के समीप आया और बोला -“गुरुजी मैं भील नरेश का सुत हूं। मैं आपसे धनुर्विद्या प्राप्त करना चाहता हूं। आप मेरे गुरु बनकर मुझे शिक्षा दीजिए।“ वही भील नरेश का पुत्र एकलव्य के नाम से जाना गया। उसने गुरु द्रोणाचार्य की मिट्टी की मूर्ति बनाकर उसी से अभ्यास किया और महान धनुर्धर बना।

(क) एकलव्य किसका शिष्य बनना चाहता था?

(ख) एकलव्य किसका पुत्र था?

(ग) द्रोणाचार्य कौन थे?

(घ) एकलव्य ने द्रोणाचार्य से क्या कहा?

(ङ) पुत्र और राजा के लिए समानार्थी शब्द अनुच्छेद से चुनकर लिखिए।

(ii) सी. वी. रमन भारत के प्रसिद्ध वैज्ञानिक थे। वे बचपन से ही शरीर से दुबले पतले थे। किंतु दिमाग के धनी थे। उन्होंने अपनी प्रतिभा से यह साबित कर दिया कि यदि प्रतिभा हो तो विदेश जाकर पढ़ने की जरूरत नहीं है। इन्होंने विज्ञान के क्षेत्र में नए-नए प्रयोग किए। इनकी खोज 'रमन प्रभाव' के कारण नोबेल पुरस्कार मिला। भारत में यह पुरस्कार रविंद्र नाथ टैगोर के बाद उन्हें ही प्राप्त हुआ।

(क) सी०वी० रमन बचपन में कैसे थे?

(ख) सी० वी० रमन ने अपनी प्रतिभा से क्या साबित कर दिया?

(ग) सी वी रमन को किस खोज के लिए नोबेल पुरस्कार मिला?

(घ) बच्चा शब्द की भाववाचक संज्ञा गद्यांश में से छांट कर लिखिए।

(ङ) गद्यांश में से एक संज्ञा व एक विशेषण शब्द छांट कर लिखिए।

खंड-ख (व्याकरण)

2. निम्न विराम-चिह्नों का प्रयोग कर वाक्य बनाइए।

(4)

(क) (?)

(ख) (-)

(ग) (“ ”)

(घ) (|)

3. दिए गए वाक्यों में से विशेषण तथा विशेष्य शब्द छांट कर लिखिए। (3)
- (क) राधा के पास सुंदर कपड़े हैं।
 (ख) हमारे शहर में पुराना मंदिर है।
 (ग) यह किताब रोहन की है।
4. क्रिया शब्दों को रेखांकित करके लिखिए। (3)
- (क) गमले में फूल खिले हैं।
 (ख) राम जाता है।
 (ग) मोहन दौड़ता है।
5. निम्न वाक्यों की क्रिया का काल बताइए। (3)
- (क) नीलिमा भोजन कर रही है।
 (ख) मैंने मैच देखा था।
 (ग) वह आ जाएगा।
6. नीचे लिखे वाक्यों में सर्वनाम शब्द छांट कर लिखिए। (2)
- (क) मैं आज बहुत खुश हूँ। (ख) देखो, बाहर कोई खड़ा है।
7. निम्नलिखित वाक्यों में से उद्देश्य और विधेय अलग-अलग करके लिखिए। (2)
- (क) गीत अच्छा गाती है। (ख) मोहिनी आम खा रही है।
8. निम्नलिखित मुहावरों के अर्थ लिखकर वाक्य में प्रयोग कीजिए। (2)
- (क) हवा से बातें करना (ख) नानी याद आना
9. नीचे दिए गए अशुद्ध वाक्यों को शुद्ध करके लिखिए। (2)
- (क) यह कौन का समान हैं। (ख) मेरे को दूध अच्छा नहीं लगता।
10. रिक्त स्थानों की पूर्ति कीजिए। (4)
- (क) वर्ष में एक बार होने वाला ----- कहलाता है।
 (ख) पेड़ का पर्यायवाची शब्द ----- होता है।
 (ग) आदर का विलोम शब्द ----- होता है।
 (घ) जो दया करता है----- उसे कहते हैं।

खंड - ग (साहित्य)

11. निम्नलिखित शब्दों के अर्थ लिखिए। (5)
- परोपकार, व्यस्त, दुलारा, आग्रह, विकट
12. निम्नलिखित शब्दों का वाक्य में प्रयोग कीजिए। (5)
- अत्याचारी, दूषित, निर्मल, अभ्यास, निपुण

13. निम्नलिखित प्रश्नों के उत्तर दीजिए।

(10)

- (क) अल्बर्ट श्वाइत्ज़र डॉक्टर बनने के बाद कहां चले गए?
(ख) विकास का मन खेल या पढ़ाई में क्यों नहीं लग रहा था?
(ग) गौरेश ने विकास को मनीष की शिकायत करने से क्यों रोका?
(घ) बालक के घर का वातावरण कैसा था?
(ङ) खजूर के पेड़ जैसा बड़े होने का कोई लाभ क्यों नहीं है?

14. निम्नलिखित गद्यांश को पढ़कर प्रश्नों के उत्तर दीजिए।

(5)

महाराजा, अब झूठा है। अपने आप में न मेरे पास खुशबू है, ना बदबू। पहले ऐसा नहीं होता था। पर आजकल यह लोग मरे हुए पशु-पक्षियों को यहां- वहां डाल देते हैं। इसके कारण मैं बदबू वाली हो जाती हूं। इनके कारखाने से निकली गंदगी और विषैली गैसों मुझमें घुल जाती हैं और यह बदबू दूर तक फैलती रहती है।

- (क) 'मेरे' शब्द किसके लिए प्रयुक्त हुआ है?
(ख) कौन से आरोप की बात की गई है?
(ग) बदबू के क्या-क्या कारण हैं ?
(घ) लोग मरे हुए पशु-पक्षियों को कहां डाल देते हैं?
(ङ) निम्नलिखित शब्दों के विलोम शब्द लिखिए।

सच्चा ----- दूर -----

15. रिक्त स्थानों की पूर्ति कीजिए।

(5)

- (क) बड़ा----- था वह बादशाह!
(ख) शहर में----- छा गया।
(ग) अपने भाई के -----के लिए वह मां-बाप का गुस्सा सहने को तैयार थी।
(घ) वह सारे घर का -----.था।
(ङ) बहन दौड़कर थोड़ी- सी -----, थोड़े-से चावल सजा लाई।

खंड-घ (रचनात्मक लेखन)

16. पढ़ेगा इंडिया, बढ़ेगा पड़ेगा बढ़ेगा अथवा कंप्यूटर का महत्व पर अनुच्छेद लिखिए।


(5)

17. छात्रवृत्ति के लिए प्रधानाचार्या को पत्र लिखिए।

(5)

18. चित्र देखकर 5 पंक्तियां लिखिए।

(5)



POLE STAR PUBLIC SCHOOL
SECTOR-7 EXTN.GURUGRAM, HARYANA
SAMPLE PAPER (2024-2025)

Class- V
M.M- 80

Subject- Maths
Time -3 Hours

GENERAL INSTRUCTIONS:

- All questions are compulsory.
- Write the serial number of question before attempting.
- Revise the paper before submitting.

1. Multiple choice questions.

(10X1=10)

- a) Liquid used in thermometers is called _____.
- i. centimetre ii. inch iii. decametre iv. Mercury
- b) A line segment has _____ end points.
- i. 0 ii. 1 iii. 2 iv. 3
- c) How much distance will be covered in 5 hours at a speed of 50 km per hour?
- i. 50 ii. 40Km iii. 250Km iv. 280cm
- d) Bali's books weight 2 g. What is the weight in mg?
- i. 24mg ii. 2000kg iii. 2000mg iv. 2400 mm
- d) Rita sold a TV for ₹ 24,900 at a profit of ₹ 600. Find the price at which she bought it.
- i. ₹ 24300 ii. ₹ 24300 iii. ₹ 2400 iv. ₹24321
- e) Find 21 % of 200.
- i. 40° ii. 42° iii. 42% iv. 40%
- f) Change 50° temperatures into Fahrenheit scale.
- i. 86 ii. 122 iii. 80° iv. 60°
- g) $112.3 \div 1000 =$ _____.
- i. 11.23 ii. 1.123 iii. 0.1123 iv. 112.3
- h) The decimal 23.456 is read as:
- i. Two three point four five six ii. Two three point four hundred fifty six
- iii. twenty three point four hundred fifty six iv. twenty three point four five six
- h) Water boils at _____ temperature .
- i. 0°C ii. 100°C iii. 35°C iv. 10°C

2. Fill in the blanks.

(10X1=10)

- a) $1345.02 \div 10000$ _____.
- b) $34.567 \times 100 =$ _____.
- c) Write $\frac{15}{100}$ as per cent _____.
- d) What % is 25 of 200? _____
- e) Find the product $0.7 \times 7 =$ _____.
- f) One kg basmati rice cost ₹43.75. Find the cost of 17 kg of rice _____.
- g) Express 5 l in ml. _____
- h) A car travels 120 km in 2 hours _____.
- i) Normal body temperature = _____ °C .
- j) A triangle in which two of its sides are equal in length is called an _____ triangle.

SECTION - B

3. Solve the following questions.

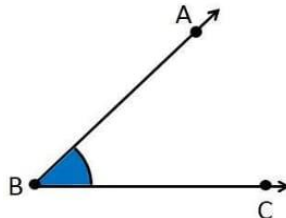
(10X2=20)

- a) Write $\frac{6865}{100}$ as decimal.
- b) Subtract: $10.3 - 4.95$
- c) Speed 960 km/h, time -1 hours 50 minutes find the distance covered
- d) Express 49018 l in dal, hl and kl.
- e) Change 95° temperature into Celsius scale.
- f) The speed of a train is 60km/h. find its speed in metres per second.
- g) Draw 125° angles by using protractor.
- h) Draw a circle whose diameter is 10 cm. Find the radius.
- i) A boy walks at a speed of $3\frac{1}{2}$ km/h. He reaches his school in 30 minutes. How far is the school from his house?
- j) Change 75° in to Fahrenheit scale.

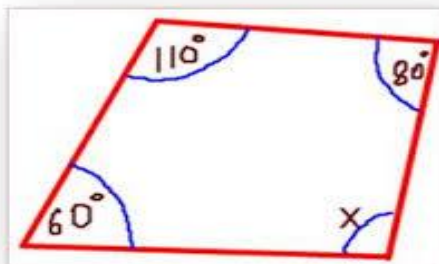
4. Solve the following questions. (Do any eight)

(8X3=24)

- a) Raj has ₹ 982.30. He gave $\frac{1}{4}$ to his son and $\frac{1}{2}$ to his wife. How much money did Raj keep for himself?
- b) The sales tax for medicines is 12% extra. If a strip of Disprin cost ₹ 6, what is the total cost of the strip of Disprin?
- c) Jolly sold her gaset for ₹ 20,000 at a profit of ₹1,737. Find the C.P. of gaset.
- d) A box of chocolates weighs 343 g. Find the weight of half a dozen such boxes in kg.
- e) How long will an athlete take to run a race of 500 m, if the speed is 50 km per hour?
- f) Simplify : $8.5 - \{4.07 - (1.2 - 0.9)\}$ of 1.6
- g) Name angle in two ways. Measure angle and mention the types of angle.



- h) Draw a circle of radius 6 cm. Measure the diameter and verify that the length of diameter is 12 cm.
- i) Find the unknown in the given angle



POLE STAR PUBLIC SCHOOL
SECTOR-7 EXTN.GURUGRAM, HARYANA
SAMPLE PAPER (2024-2025)

Class- V
M.M- 80

Subject- Science
Time -3 Hours

GENERAL INSTRUCTIONS:

- All questions are compulsory.
- Write the serial number of question before attempting.
- Revise the paper before submitting.

1. Multiple choice questions

(0.5X5=2.5)

- a) Which of these is an inclined plane wrapped around a nail?
i. Wedge ii.Screw iii.Ramp iv.Wheelandaxle
- b) Which of these would you use to measure shorter lengths?
i. Kilometre ii.Centimetre iii. Litre iv. Kilogram
- c) Which of these is the purest form of water?
i. Filteredwater ii.Decanted water iii.Boiled water iv.Distilledwater
- d) Which of these is not a type of pollution?
i.Airandwater ii.Landandsoil iii.Noise iv. Deforestation
- e) Which of these will not form a shadow?
i. Transparentobjectsii.Translucentobjects iii.Opaqueobjects iv.Bothi &ii

2. Write true or false for the following statements:

(0.5X5=2.5)

- a) We cannot hear any sound on the moon.
- b) The rate of sedimentation can be increased by adding chlorine.
- c) Friction always produced heat.
- d) All objects cast shadow on the ground.
- e) Floods are also called harbor waves.

3. Fill in the blanks:

(5X1=5)

- a) 21% of the air is made up of _____ gas.
- b) A simple machine uses a _____ force.
- c) The length of the shadow _____ during the day.
- d) Air contains _____ of nitrogen.
- e) _____ plants are often used as cover crops.

4. Give two examples of the following:

(5X1=5)

- a) Types of forces _____, _____
- b) Metamorphic rocks _____, _____
- c) Soil Conservation _____, _____
- d) Causes of land pollution _____, _____
- e) Inclined plane _____, _____

5. Give one word of the following:

(5X1=5)

- a) Objects form dark shadows _____.
- b) The layer we live in is called _____.
- c) Droughts are common in the state of _____.
- d) Shortage of food results in _____.
- e) An opaque object _____.

6. Define the following:

(5X1=5)

- a) Shadow
- b) Seismograph
- c) Pollution
- d) Atmosphere
- e) Tsunami

SECTION - B

7. Answer the following questions:(2x6=12)

- a) List three uses of rocks and minerals.
- b) Explain how is soil formed?
- c) What is wedge?
- d) How does an earthquake occur?
- e) How can air pollution be controlled?
- f) What are tides? How do they occur?

8. Answer the following questions:

(3x6=18)

- a) What preventive measures can you take in case of drought?
- b) Explain the layers of the atmosphere. Write one line on each.
- c) With the help of an example describe a wheel and axle.
- d) In what ways do simple machines make our work easier?
- e) How can we prevent land pollution?
- f) What are transparent objects? How are they different from translucent objects?

9. Answer the following questions:

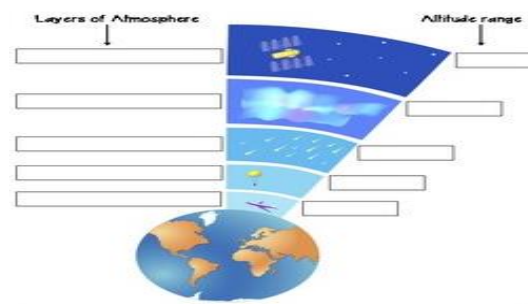
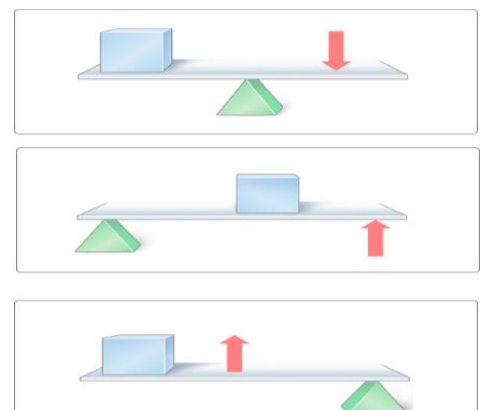
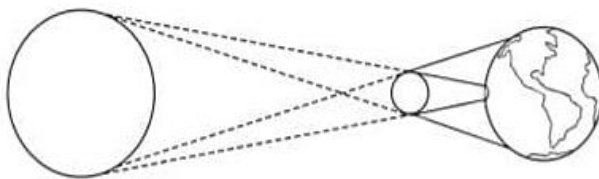
(4X3=12)

- a) Distinguish between Solar and Lunar exlipse.
- b) Distinguish between afforestation and deforestation.
- c) Explain how does the atmosphere help to maintain the right temperature on the earth.

SECTION - C

10. Label the given diagram:-

(5)



POLE STAR PUBLIC SCHOOL
SECTOR-7 EXTN.GURUGRAM, HARYANA
SAMPLE PAPER (2023-2024)

Class- V

**Subject- Social
Science
TIME-3 HOURS**

M.M- 80

General Instructions:

- **Read the question paper carefully.**
- **Write neatly and legibly.**
- **Do not overwrite. Pay special attention to spellings.**
- **Read the answer before submitting the answer paper.**

SECTION A

- 1. Multiple choice questions (5)**
2. Gabriel Daniel Fahrenheit was a
(a) Politician (b) Economist (c) Physicist (d) Psychologist
 3. The petrol engine was invented by
(a) Daimler (b) Newton (c) James Watt (d) Edison
 3. Nelson Mandela fought against
(a) slavery (b) Apartheid. (c) Socialism (d) Democracy
 4. The headquarters of U.N is at
(a) New York (b) Rome. (c) London (d) Jspan
 5. The International Court of Justice is located at
(a) Washington D.C (b) The Hague (c) Rome (d) Geneva

2. Fill in the blanks: - (5)

1. _____ is a former U.S.S.R led the two opposite blocs.
2. The Battle of _____ was fought in 1757
- 3.. _____ movement was launched in 1920.
4. The _____ is the executive branch of U.N
5. Nelson Mandela spent _____ years in jail.

3. Key Words (5)

1. Referendum 2. Renewable 3. Properties 4. Veto power 5. Explorer

4. Write True or False (5)

1. Robert Clive won the Battle of Buxar.
2. India promoted the policy of Apartheid.
3. The trusteeship Council helped free 11 trust territories.
4. Olive branches are the symbols of war.
5. The title of Mahatma was given to Gandhi ji by Rabindranath Tagore.

5. Match the following (5)

- | | |
|---------------------|--------------------|
| 1. Slavery | New York |
| 2. General Assembly | Gamal Abdel Nasser |
| 3. UNICEF | Congress |
| 4. Egypt | Southern U.S.A |
| 5. A.O Hume | World parliament |

6. Answer the following question

(20)

1. What is stethoscope used for?
2. What is a machine? Name any two machine.
3. What did Nelson Mandela do for his country?
4. Why was the war fought between 1914-18 called the First World War?
5. What are the functions of Security Council?
6. Name four SAARC countries.
7. When was Battle of Plassey fought? What was its result?
8. What was the Rowlatt Act? When was it passed?
9. Who is called Neta ji? What slogan did he coin?
10. When and for what purpose was the British East India established?

7. Long answer type of question-

(30)

1. What were the causes of failure of Revolt of 1857?
2. Name the six organs of U.N
3. What are the objective of U.N?
4. Give some ways to keep fit.
5. Describe and draw the United Nation's Flag.
6. When was Bengal partitioned? What was its result

8. Locate the 5 neighbouring countries of India on political map of India.

(5)

पोल स्टार पब्लिक स्कूल सेक्टर 7
एक्सटेंशन गुरुग्राम (हरियाणा)
आदर्श प्रश्न-पत्र (2024_2025)

कक्षा : पांचवी

कुल अंक : 40

विषय : संस्कृत

समय: 1 घंटा

सामान्य निर्देश

सभी प्रश्नों के उत्तर देना अनिवार्य है।

लेख सुंदर व स्पष्ट लिखे ।

(खण्ड - क)

1 गद्यांशं पठित्वा अधोलिखितानां प्रश्नानाम् उत्तराणि लिखत। (5)

एकस्मिन् वने एकः काकः आसीत् ।सःअतीवः बुभुक्षितः आसीत् ।सः भोजनं अन्वेषणं अत्र तत्र भ्रमति स्म । अन्ते सः एकं रोटिकां पश्यति । बुभुक्षितः काकः तां रोटिकां खादितुं तत्परः अभवत् ।तदा एकः मार्जारः तत्र आगच्छति ।: मार्जारः अतीव चतुरः आसीत् । सः काकः प्रशंसाम् अकरोत् ।काकराज ! तव स्वरः अतीव मधुरं अस्ति ।एकं गीतं गाय ।यदा सःगीतं गायति तदा रोटिका अधःपतति ।मार्जारः रोटिकां खादति धावति च ।

- बुभुक्षितः कः आसीत् ?
- वने अत्र तत्र किं कारणं भ्रमति ?
- कस्य स्वरं मधुरं आसीत् ?
- मार्जारः कीदृशःआसीत् ?
- गीतं कः गायति ?

(खंड - ख) रचनात्मक कार्यम्

2. गद्यांशं पठित्वा अधोलिखितानां प्रश्नानाम् उत्तराणि लिखत। (5)

अमरः विद्यालयम् गच्छति।
सः पठनाय गच्छति ।
सायम् अमरः क्रीडति ।
पितामहः उद्यानं गच्छति।
पितामही प्रातः देवम् नमति।


- अमरः कुत्र गच्छति ?
- अमरः किमर्थम् विद्यालयम् गच्छति ?
- सायम् अमरः किम् करोति ?
- पितामहः कुत्र गच्छति ?
- पितामही प्रातः नमति ?

3 वाहनानि नामानि लिखत । (5)

ट्रक, नाव, जहाज , ऑटो रिक्शा , साईकिल

4 व्यवसायः नामानि लिखत ।

(5)



5. 'कृ' 'लिख्' च धातु 'लट्लकारः' रूपाणि लिखत।

(6)

6. शब्दार्थाः लिखत।

(2)

शनैः – शनैः , तथैव , काष्ठफलकानि , हिन्दोलः

7 संख्यावाचिशब्दाः लिखत।

(4)

6 ,13 ,18 ,20

8. भवान् चिन्तयतु प्रश्नानि उत्तरत लिखत।

(2)

क. त्वम् कदापि किं न वदसि ?

ख. त्वम् कदा पठसि ?

9 अव्यय- पदानि रेखांकित कुरुत।

(2)

क. जलम् नीचैः वहति।

ख. बालकाः उच्चैः हसन्ति।

ग. सान्या अपि फलं खादति।

घ. अधुना रमा न पठति।

10 निर्देशानुसारेण वाक्यानां वचनानि परिवर्त्य पुनः लिखत।

(4)

क. बालकाः तत्र क्रीडन्ति। (एकवचन)

ख. सः तीव्रं धावति। (द्विवचन)

ग. पत्राणि पतन्ति। (एकवचन)

घ. खगः कूजति। (बहुवचन)

DRAWING

Paper Collage, Clay Modelling Page No. 27,28